

Note Values

- Fill in the missing notes below. There may be more than one correct answer!

1) $\text{♩} + _ = \text{♩} |$

2) $\text{♩} + _ = \text{♩} |$

3) $\text{♩} + _ = \text{♩} |$

4) $\text{♩} + _ = \text{♩} |$

5) $_ + _ + _ + _ = \text{♩} |$


6) $_ + _ + _ + _ = \text{♩} |$



7) $_ + _ + _ + _ = \text{♩} |$



8) $\text{♩} + _ + _ = \text{♩} |$

9) $\text{♩} + _ + _ = \text{♩} |$




10) $\text{♩} + _ + _ + _ + _ = \text{♩} |$




11)  +  = |



12)  +  = |



13)  +  +  = |

14)  +  = |




15)  +  +  = |


16)  +  +  = |




17)  +  = |

18)  +  = |

19)  +  +  +  = |

20)  +  +  = |

21)  +  = |

22)  +  +  = |